

NOM : .....  
Prénom : .....

5<sup>ème</sup>  
24/01/2022

## Devoir surveillé n°5

### Exercice 1 (8 points)

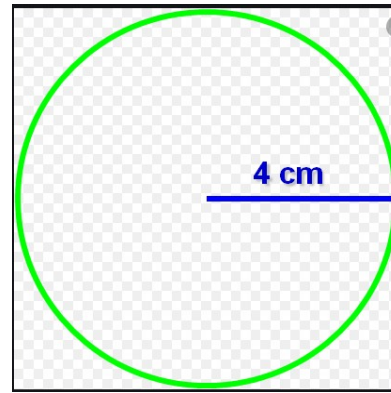
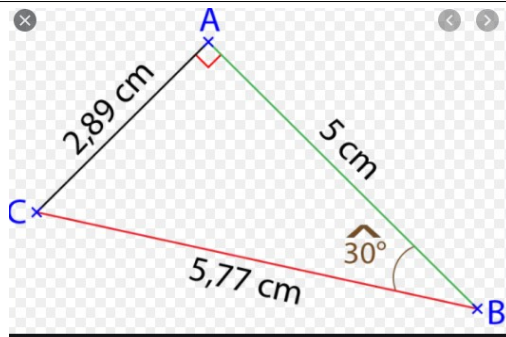
$(-8) + (-3) = \dots\dots\dots$	$(-5) + (+12) = \dots\dots\dots$	$(+7) + (-18) = \dots\dots\dots$
---------------------------------	----------------------------------	----------------------------------

$-3 + 15$ = = =	$-28 - 2$ = =	$-5 + (-3 + 7)$ = =
--------------------------	---------------------	---------------------------

$(-7) - (-13)$ = =	$(+20) - (-28)$ = =	$(-5) - (+21)$ = =
--------------------------	---------------------------	--------------------------

$(+4) + (-7) + (-23) + (+36)$ = = = =	$(-19) + (+8) + (-26) + (+32)$ = = = =
---	--

## Exercice 2 (1 point)

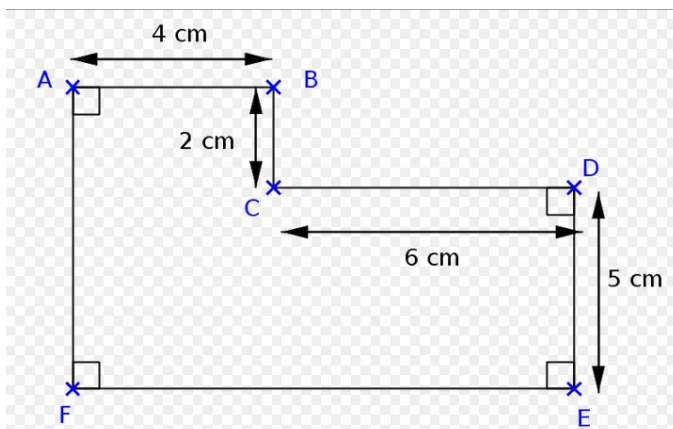


Arrondir le résultat au centième

Aire(ABC) = .....

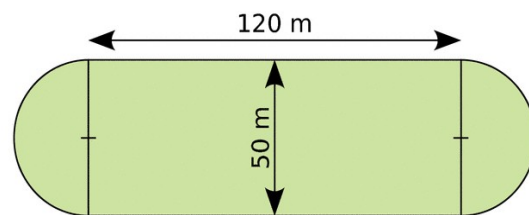
Aire du disque = .....

## Exercice 3 : (1 point)



1) Calcule l'aire de cette figure.

.....  
 .....  
 .....



2) Calcule l'aire de ce stade. Donner la valeur arrondie au millième près.

.....  
 .....  
 .....